

Name.....





Class.....

Date.....

### Counting With Pictures

How many butterflies can you see from each picture frame?

Put a dot in a box for every butterfly you see.

			
<input type="checkbox"/> <input type="checkbox"/> <input type="checkbox"/> <input type="checkbox"/> <input type="checkbox"/> <input type="checkbox"/> <input type="checkbox"/> <input type="checkbox"/>	<input type="checkbox"/> <input type="checkbox"/> <input type="checkbox"/> <input type="checkbox"/> <input type="checkbox"/> <input type="checkbox"/> <input type="checkbox"/> <input type="checkbox"/>	<input type="checkbox"/> <input type="checkbox"/> <input type="checkbox"/> <input type="checkbox"/> <input type="checkbox"/> <input type="checkbox"/> <input type="checkbox"/> <input type="checkbox"/>	<input type="checkbox"/> <input type="checkbox"/> <input type="checkbox"/> <input type="checkbox"/> <input type="checkbox"/> <input type="checkbox"/> <input type="checkbox"/> <input type="checkbox"/>








Name.....

Class.....

Date.....

# Counting With Pictures



 Ball	 Snail	 Burger	 Apple	 Rug	 Butterfly	 Beetle

Draw straight line to show the number of pictures.

Name.....

Class.....

Date.....

# Counting With Pictures

Draw a dot in a box for every shape in the box.

